

Name: _____

Making Equal Groups



Make equal groups to solve each problem!

I have 2 hands. I have five fingers on each hand.
How many fingers in all?

There are 5 cars. Each car has 4 tires. How
many tires in all?


There are 3 cartons of eggs. Each carton has 12
eggs in it. How many eggs in all?

There are 4 plates of cookies. There are 6 cookies
on each plate. How many cookies in all?


Make a picture to show:




2 groups of 5



3 groups of 4



4 groups of 2



1 group of 5