
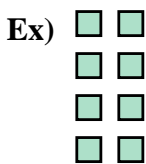




Write each array as an addition problem and solve.



Answers

Ex. $2+2+2+2=8$

1. _____

2. _____

3. _____

4. _____

5. _____

6. _____

7. _____

8. _____

9. _____



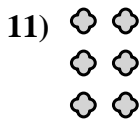
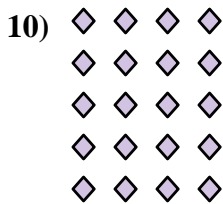



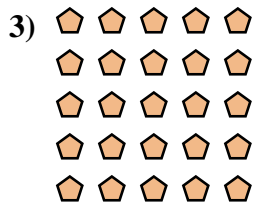
10. _____

11. _____

12. _____


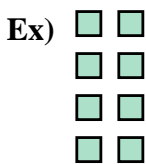
13. _____

14. _____





Write each array as an addition problem and solve.



Answers

Ex. 2+2+2+2=8

1. 5+5+5+5=20

2. 2+2+2+2+2=10

3. 5+5+5+5+5=25

4. 5+5=10

5. 5+5+5=15

6. 3+3+3=9

7. 4+4+4=12

8. 4+4=8

9. 3+3+3+3=12

10. 4+4+4+4+4=20

11. 2+2+2=6

12. 2+2=4

13. 3+3+3+3+3=15

14. 4+4+4+4=16

