
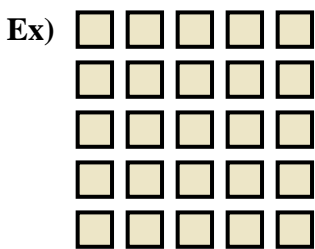




Write an equation to express the array and then find the number of shapes.



**Answers**

Ex. 5 × 5 = 25

1. \_\_\_\_\_

2. \_\_\_\_\_

3. \_\_\_\_\_

4. \_\_\_\_\_

5. \_\_\_\_\_

6. \_\_\_\_\_

7. \_\_\_\_\_

8. \_\_\_\_\_

9. \_\_\_\_\_

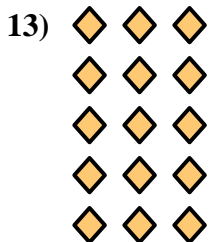




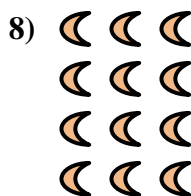
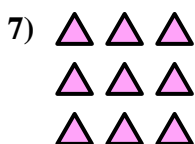
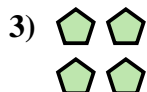
10. \_\_\_\_\_

11. \_\_\_\_\_

12. \_\_\_\_\_


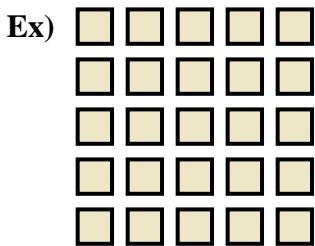
13. \_\_\_\_\_

14. \_\_\_\_\_





Write an equation to express the array and then find the number of shapes.



Answers

Ex.  $5 \times 5 = 25$

1.  $5 \times 2 = 10$

2.  $3 \times 4 = 12$

3.  $2 \times 2 = 4$

4.  $2 \times 5 = 10$

5.  $4 \times 2 = 8$

6.  $2 \times 4 = 8$

7.  $3 \times 3 = 9$

8.  $4 \times 3 = 12$

9.  $5 \times 4 = 20$

10.  $2 \times 3 = 6$

11.  $4 \times 4 = 16$

12.  $4 \times 5 = 20$

13.  $5 \times 3 = 15$

14.  $3 \times 2 = 6$

