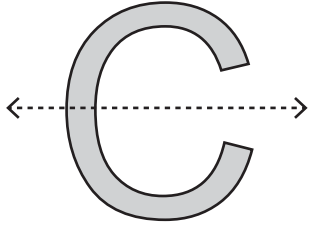


Symmetry on Letters

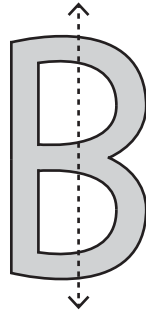
Sheet 1

Is the dotted line on each letter a line of symmetry? Write yes or no.

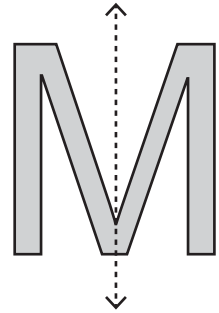
1)



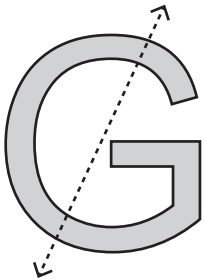
2)



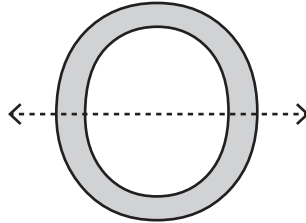
3)



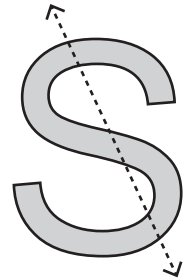
4)



5)



6)

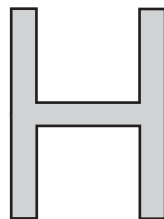


Draw a line of symmetry. (Some letters may have more than one line of symmetry)

1)



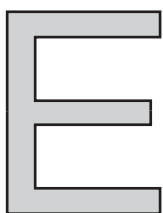
2)




3)



4)



5)



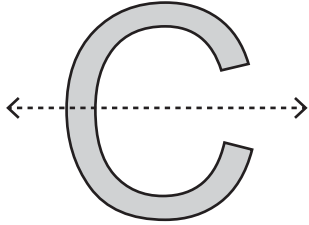
6)



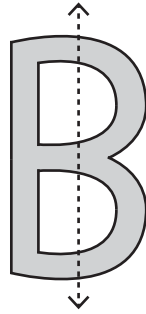
Symmetry on Letters

Is the dotted line on each letter a line of symmetry? Write yes or no.

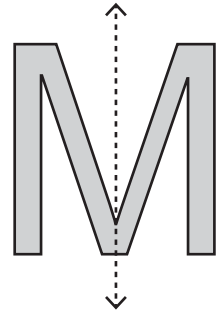
1)

**Yes**

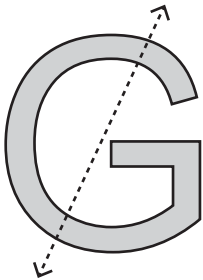
2)

**No**

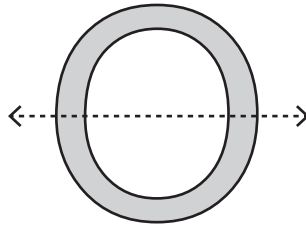
3)

**Yes**

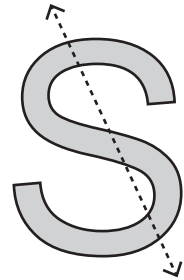
4)

**No**

5)

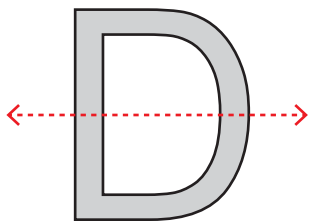
**Yes**

6)

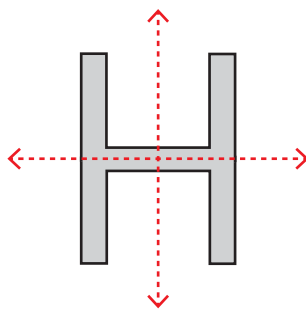
**No**

Draw a line of symmetry. (Some letters may have more than one line of symmetry)

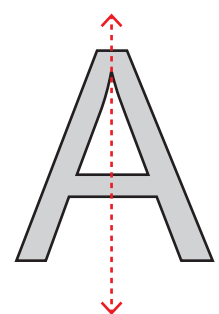
1)



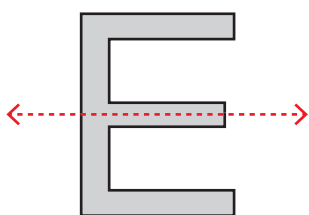
2)



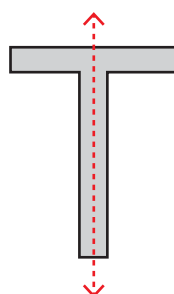
3)



4)



5)



6)

