




Write each array as an addition problem and solve.



Answers

Ex. $5+5=10$

1. _____

2. _____

3. _____

4. _____

5. _____

6. _____

7. _____

8. _____

9. _____


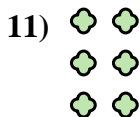
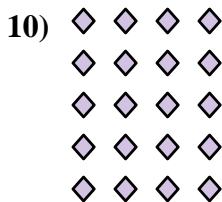
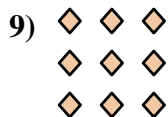
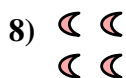



10. _____

11. _____

12. _____


13. _____

14. _____





Write each array as an addition problem and solve.



Answers

Ex. 5+5=10

1. 3+3=6

2. 2+2+2+2=8

3. 5+5+5+5=20

4. 5+5+5+5+5=25

5. 4+4+4+4=16

6. 2+2+2+2+2=10

7. 3+3+3+3=12

8. 2+2=4

9. 3+3+3=9

10. 4+4+4+4+4=20

11. 2+2+2=6

12. 4+4+4=12

13. 3+3+3+3+3=15

14. 5+5+5=15

