


Telling Time

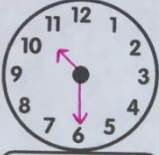
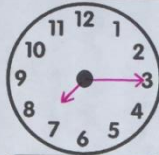
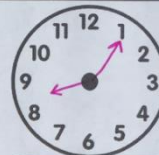
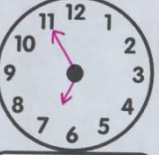
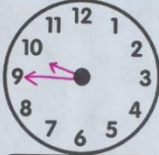
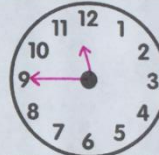
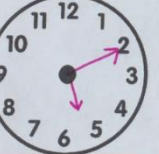

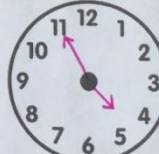
FREEBIE

Practice with :00 :15 :30 :45

...and time to the 5 minutes!

 **Can You DRAW IT?** Name: Brenda

Draw the hands on the clock to match the time in the box.

 10:30	 7:15	 8:05
 6:55	 9:45	 11:45
 5:10	 12:20	 4:55



Thank you!


You have successfully purchased and downloaded a quality resource from Benzel's Beginnings! Please know that this resource is **only for you and your classroom**. You may not copy for or email this product to another teacher. Instead, please direct him or her to my TpT site.



BENZEL'S
beginnings


If you like this product, please leave feedback! This will earn you credits to use for other products on TpT. If you find a mistake or something goes wrong, send me a message on TpT instead of leaving poor feedback. Feel free to follow me to know when I post new products!

Name: _____




Circle the time to the hour

Circle the time that matches the hour shown on the clock.




9:00

7:00




3:00

5:00




2:00

12:00




12:00

8:00




10:00

4:00



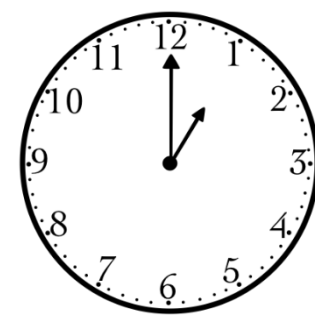
6:00

7:00



11:00

4:00




1:00










2:00

Name: _____

Telling TIME to the Quarter Hour



Write the correct time in the box.




Name: _____


Matching Time to the Half Hour




Draw a line to match the 3 clocks to the correct time in each box.




3:30




7:30




5:30




9:30




6:30




12:30



2:30




10:30




1:30



4:30



11:30




8:30


Name: _____


Cut & Paste


---hour, quarter hour & half hour ---


Cut out the times below. Glue them in the boxes underneath their matching clock.




















Resource created by Benzel's Beginnings

4:30

12:00

7:30

6:15

2:15

5:00

10:00

3:15

Name: _____

TELLING TIME!


:00

:15


:30

:45


Write the correct time in the box.




⋮




⋮




⋮




⋮




⋮




⋮



⋮



⋮




⋮




Can You DRAW IT?

Name: _____


Draw the hands on the clock to match the time in the box.




10:30




7:15




8:05




6:55




9:45




11:45



5:10



12:20



4:55

Like this resource?

Click below to get the full packs!

Telling Time
to the half hour

a Benzel's Beginnings resource

Telling Time
to the quarter hour

a Benzel's Beginnings resource

Telling Time
to the hour

a Benzel's Beginnings resource

Telling Time
to
 and minutes

a Benzel's Beginnings resource

Telling Time
to the three quarter hour

a Benzel's Beginnings resource

Telling Time
to the nearest minutes

a Benzel's Beginnings resource

Or save \$\$\$\$ by purchasing this bundle with all 6 packs above!

Telling Time
MEGA BUNDLE

90 NO PREP PRINTABLES to practice telling time!

BENZEL'S Beginnings

Clip art, graphics and fonts by:

